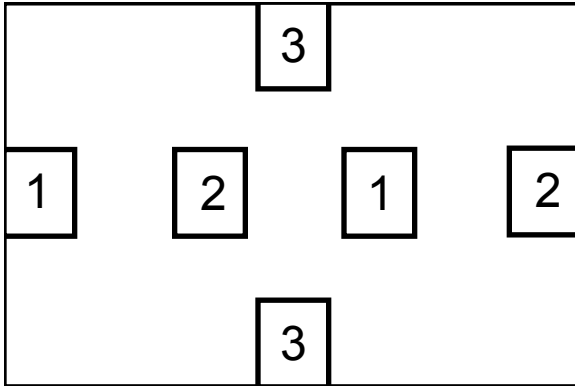



## Warm-up Puzzles

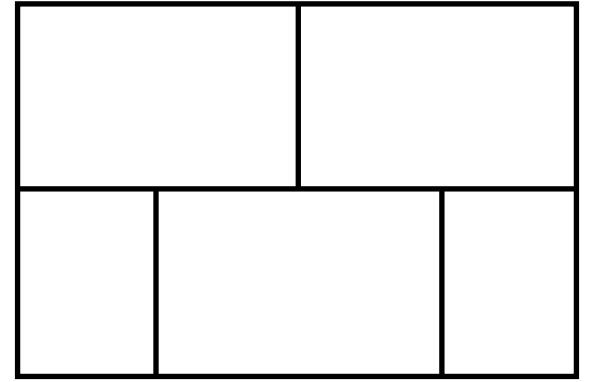
Connect the two 1-boxes, the two 2-boxes, and the two 3-boxes with curves which do not intersect each other and which stay inside the large box..



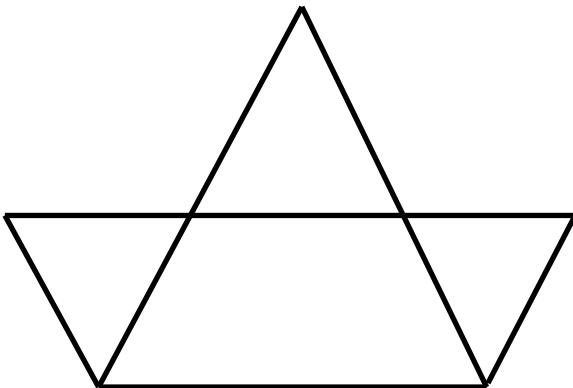
Without picking up your pencil, draw four straight lines which contain all 9 points.



Without picking up your pencil, draw a curve which passes through each “wall” of the “floor plan” below only once.



Without picking up your pencil and without retracing any segment, draw this diagram. Can you do it starting at the top vertex; at one of the bottom vertices?.



Connect each of the 5 dots to the other 4 with curves which remain on the surface of the doughnut and which do not intersect each other.

